

Candidate Name

Centre Number

Candidate Number



ZIMBABWE SCHOOL EXAMINATIONS COUNCIL
GRADE SEVEN EXAMINATION.

SOCIAL SCIENCE
PAPER 2

705/2

SPECIMEN PAPER

Time: 1 hour 30 minutes

Section A

Answer **all** questions.

Write your answers in the spaces provided on the question paper.

Section B

Answer any **three** questions.

Write your answers in the spaces provided on the question paper.

Section C

Answer any **two** questions.

Write your answers in the spaces provided on the question paper.

FOR EXAMINER'S USE	
Section A	
1	
2	
3	
4	
5	
Section B	
Section C	
TOTAL	

This question paper consists of 12 printed pages.

Copyright, Zimbabwe School Examinations Council, Specimen Paper

©ZIMSEC SPECIMEN PAPER

[Turn over

Section A

Answer **all** questions in this section.

Write your answers in the spaces provided on the question paper.

1 Mr Temius has four wives, nine children and also owns some domestic animals.

(a) Name the type of family Mr Temius has.

_____ [1]

(b) Give any other type of family that exists in communities.

_____ [1]

(c) State why domestic animals are a valuable family possession.

_____ [1]

(d) Identify how family members can depend on each other.

_____ [1]

(e) Suggest why family roles are important in the community.

_____ [1]

2 **(a)** Give any **one** way a person can be sexually abused.

_____ [1]

(b) State **one** action to be taken when a learner is abused at school.

_____ [1]

(c) Name **one** way religion can help an abused person.

_____ [1]

(d) List **one** substance which can be abused.

_____ [1]

- (e) Identify **one** way in which a community can assist people who abuse substances.

_____ [1]

- 3 (a) Give **one** example of a pre-colonial state.

_____ [1]

- (b) The diagram shows a national symbol.



- (i) Name the national symbol.

_____ [1]

- (ii) The Kudus on the national symbol represent

_____ [1]

- (c) State **one** cause of the first Chimurenga/Umvukela.

_____ [1]

- (d) Give **one** example of an Indigenous Court in Zimbabwe.

_____ [1]

- 4** Natural resources should to be preserved for the benefit of the present and future generations.

(a) (i) Name **one** natural resource.

_____ [1]

(ii) State **one** reason for conserving natural resources.

_____ [1]

(b) The process of replanting trees on an area which had trees before is called

_____ [1]

(c) Identify **one** effect of veld fires on the environment.

_____ [1]

(d) Suggest **one** way of overcoming desertification.

_____ [1]

- 5 (a) (i)** State **one** reason why spitting in a public place is bad.

_____ [1]

(ii) Give **one** example of a communicable disease.

_____ [1]

(b) (i) State **one** good career in one's life time.

_____ [1]

(ii) Explain why the career named in **(b)(i)** is good.

_____ [1]

(c) Define the term vandalism.

_____ [1]

Section B

Answer any **three** questions in this section.

Write your answers in the spaces provided on the question paper.

6 Jesus Christ had followers who were called disciples.

(a) Name **one** of the disciples.

[1]

(b) (i) Jesus used parables in his teachings.

Give the meaning of the word parable.

[1]

(ii) The parable of the two sons teaches

[1]

(c) Describe how Jesus Christ was crucified.

[1]


(d) State the place where Jesus was crucified.

[1]

7 (a) Give the name of the founder of the Jewish religion.

[1]

- (b) The diagram shows an artefact of a religion.



- (i) Name the artefact.

[1]

- (ii) Give **one** ceremony of the Jewish religion.

[1]

- (c) Jews worship in a

[1]

- (d) State the religion where circumcision is a rite.

[1]

- 8 Shi'a is one of the two main groups in Islamic religion.

- (a) Name the other main group.

[1]

- (b) State any **one** of the Islamic ceremonies.

[1]

- (c) Religious practitioners have different tasks and roles in the Islamic religion.
Name any **one** group of Islamic religious practitioners.

[1]

- (d) Moslems pray five times a day facing a place called _____ [1]
- (e) Identify any **one** of the five pillars of Islam. _____ [1]
- 9 (a) Give the name of a sacred place in a traditional hut. _____ [1]
- (b) Name any **one** group of Indigenous religion practitioners. _____ [1]
- (c) State any **one** national ancestor in Zimbabwe. _____ [1]
- (d) Identify the law which suppresses Indigenous religion. _____ [1]
- (e) Identify any **one** traditional Indigenous religion artefact. _____ [1]
- 10 (a) HIV can be contracted in many ways.
- (i) State any **one** way HIV can be contracted. _____ [1]
- (ii) Identify **one** way of preventing HIV and AIDS. _____ [1]
- (iii) State **one** way that learners with parents suffering from HIV and AIDS may be affected. _____ [1]

(b) Reproduction is one of the five circles of sexuality.

(i) State any **one** circle of sexuality apart from reproduction.

_____ [1]

(ii) Explain reproduction from the circles of sexuality.

_____ [1]

Section C

Answer any **two** questions in this section.

Write your answers in the spaces provided on the question paper.

- 11** Long ago, people lived mainly on hunting and gathering. They used different hunting tools.
- (a) (i) Name any **one** indigenous hunting tool which was used in Zimbabwe.
- _____ [1]
- (ii) Identify **one** material which hunters used to make indigenous hunting tools.
- _____ [1]
- (b) A rite of passage is a ceremony or event that is held to mark an important stage in a person's life.
- Name any **one** occasion which symbolises the rite of passage.
- _____ [1]
- (c) After a funeral, the property of the deceased is shared.
- Identify the person who shares the property of the deceased after burial in the Indigenous religion.
- _____ [1]
- (d) State an Indigenous ritual ceremony done a year after the death of a family member.
- _____ [1]
- 12** (a) (i) State the cause of a drought.
- _____ [1]
- (ii) Identify **one** effect of drought.
- _____ [1]

- (b) Give **one** way of reducing poverty in Zimbabwe.

_____ [1]

- (c) The diagram shows a polluted area in the environment.



- (i) Name the form of pollution shown.

_____ [1]

- (ii) Suggest **one** way of preventing such pollution.

_____ [1]

- 13 (a) The gestation period of a human is

_____ [1]


- (b) (i) State **one** advantage of immunising babies.

_____ [1]

- (ii) Explain why the mother's milk is the best for babies.

_____ [1]

- (c) The picture shows a boy and a girl exchanging love tokens in the presence of the girl's aunt.



- (i) Give any **one** purpose of the practice.

_____ [1]

- (ii) State **one** role played by aunts and uncles during courtship.

_____ [1]

- 14 (a) State any **one** responsible behaviour that can be shown at work.

_____ [1]


- (b) Name an association which is responsible for the running of football in Zimbabwe.

_____ [1]

- (c) Identify **one** area of art.

_____ [1]

- (d) The picture shows a person welding.



Name **one** protective clothing the man is wearing.

[1]

- (e) Identify the type of material which welders use to produce a variety of items.

[1]